

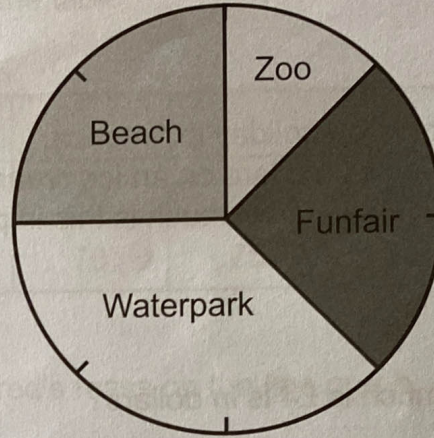
Pie Charts

1

48 children vote on where they should go for a trip.

The results of the vote are shown in the pie chart.
Use the pie chart to complete the table of results.

Trip destination	Number of votes
Zoo	
Funfair	
Waterpark	
Beach	



2

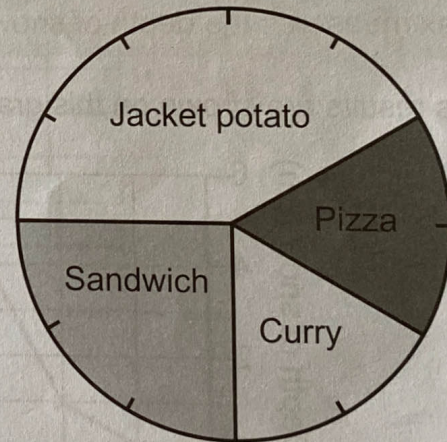
The school lunch choices of the children in Year 6 are shown in the pie chart below.

20 children chose pizza.
How many children are in Year 6?

 children

How many more children chose a sandwich than curry?


 children



3

10 children in a Healthy Eating Club have dressed up as fruit.

Kyle wants to draw a pie chart of their costume choices.
How many degrees will represent each child?



2 children dressed as bananas.
How many degrees are needed for this sector?

